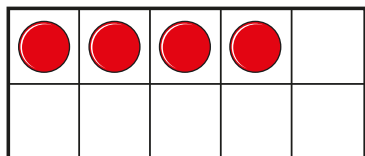
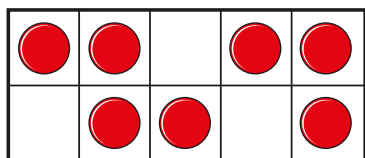




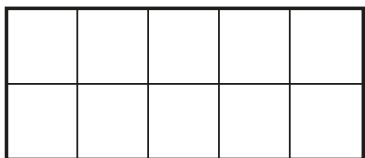
1 a) Draw one more than 4




b) Draw one more than 7




c) Draw one more than 5



2 a) Circle one more than 6



b) Circle one more than 1



3 Write the missing numbers.

a) One more than 3 is

b) One more than seven is

c) One more than 9 is

d) One more than 0 is

4 Write the missing numbers.

a) One more than is 5

b) One more than is nine.

c) One more than is 1

5 Colour the number that is one more than 6

