


1 How many balloons are there?

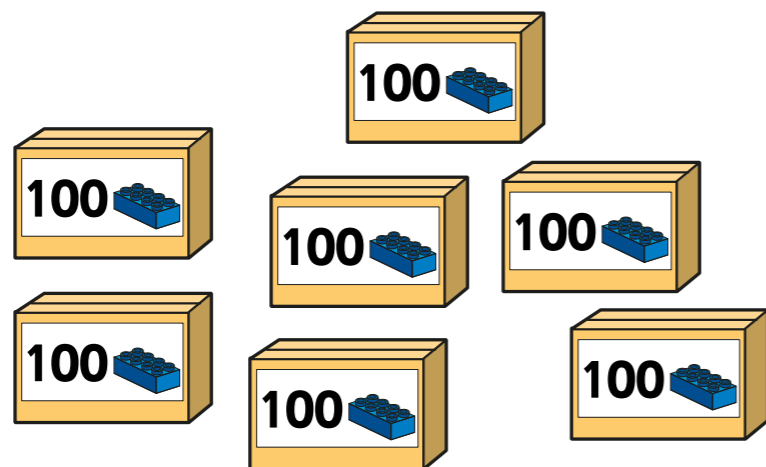


Write your answer in numerals and words.

There are balloons.

There are _____ balloons.

2 How many bricks are there?



There are bricks.

There are _____ bricks.

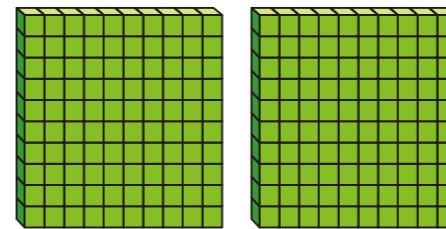


3 Circle 800 pins.

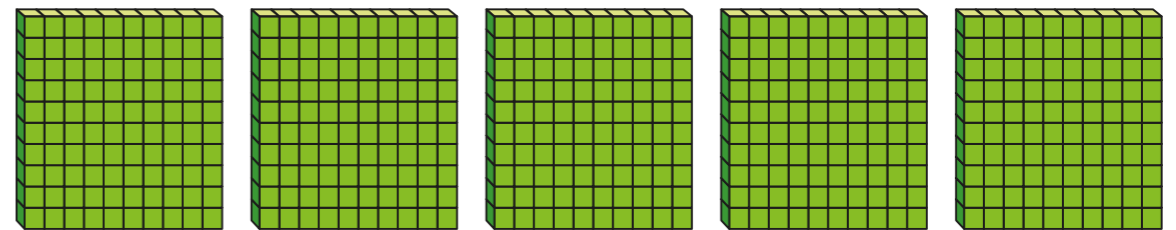


4 What numbers are represented?

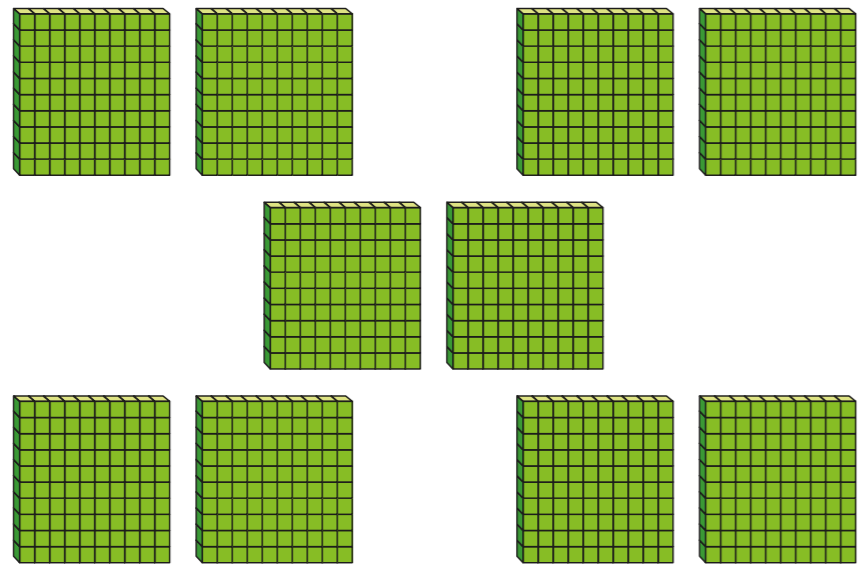
a)



b)




5 Jack makes this number.



Is Jack correct? _____

Write the number a different way.

6 Complete the number tracks.



7 Rosie starts from zero and counts up in 100s.

Circle the numbers that she says.

- 500 50 900 70
- 1,000 100 99 10

8 Amir needs 700 counters.
There are 100 counters in each bag.
Amir has 400 counters.



How many more bags of counters does he need?

Amir needs more bags of counters.

How did you work this out? Talk to a partner.

9 Is 100 represented here? Talk about it with a partner.

